

between the two?

is the difference in quantity

Count two collections. What

## **COUNTING COLLECTIONS**

## **COUNTING COLLECTIONS**

Count two collections. What

is the difference in quantity

between the two?

**Choose a two or three-digit  
number. Roll a dice and  
subtract that from your  
number. Record the equation.**

## **Choosing Game**

## **Choosing Game**

**Choose a two or three-digit  
number. Roll a dice and  
subtract that from your  
number. Record the equation.**

**Choose a subtraction equation.  
Solve the equation in at least  
two different ways.**

**Choose a subtraction equation.  
Solve the equation in at least  
two different ways.**


**Choose a math problem.  
Solve the problem in at  
least two different ways.**

**Choose a math problem.  
Solve the problem in at least  
two different ways.**



**small or great as possible.**  
**boxes so that the difference is as**  
**most one times each, fill in the**  
**Using four of the digits (1-9) at**  
**SUBTRACTING TWO-DIGIT NUMBERS**

**SUBTRACTING TWO-DIGIT NUMBERS**



**Using four of the digits (1-9) at**  
**most one times each, fill in the**  
**boxes so that the difference is as**  
**small or great as possible.**





—




—



—



—



**question be?**

**What could the**

**The answer is \_\_\_\_\_.**

**The answer is \_\_\_\_\_.**

**What could the  
question be?**

**FACE-OFF**

**SUBTRACTION**

**SUBTRACTION**

**FACE-OFF**

**The librarian had 653 books about sports in the library. After two classes visited, they had taken out 78 books about sports. How many books about sports were left in the library?**

**Charlotte had saved \$22 and wanted to buy a new stuffie that cost \$9 and a book that cost \$5. How much money would she have left after she bought those two things?**

**One school garden grew 84 pumpkins and another grew 38 pumpkins. How many more pumpkins did the first garden grow?**

